



JEE (Main)

PAPER-1 (B.E./B. TECH.)

© Resonance Eduventures Limited | Toll-Free 1800-258-5555 | (0)744 2777777, 2777700 | contact@resonance.ac.in | CIN - U80302RJ2007PLC024029

2021

COMPUTER BASED TEST (CBT) Memory Based Questions & Solutions

Date: 25 July, 2021 (SHIFT-1) | TIME : (9.00 a.m. to 12.00 p.m)

© Resonance Eduventures Limited | Toll-Free 1800-258-5555 | (0)744 2777777, 2777700 | contact@resonance.ac.in | CIN - U80302RJ2007PLC024029

SUBJECT: PHYSICS

Resonance Eduventures Ltd.

Reg. Office & Corp. Office : CG Tower, A-46 & 52, IPIA, Near City Mall, Jhalawar Road, Kota (Raj.) - 324005

Ph. No.: +91-744-2777777, 2777700 | FAX No. : +91-022-39167222

To Know more : sms RESO at 56677 | Website : www.resonance.ac.in | E-mail : contact@resonance.ac.in | CIN : U80302RJ2007PLC024029

Toll Free : 1800 258 5555 | 7340010333 | facebook.com/ResonanceIndia | twitter.com/ResonanceIndia | www.youtube.com/reswatch | blog.resonance.ac.in

This solution was download from Resonance JEE (MAIN) 2021 Solution portal

© Resonance Eduventures Limited | Toll-Free 1800-258-5555 | (0)744 2777777, 2777700 | contact@resonance.ac.in | CIN - U80302RJ2007PLC024029

PART : PHYSICS

1. A body of mass 2 kg and linear velocity 4 m/s collides elastically head on with another body at rest. After collision body of mass 2 kg starts moving with velocity 1 m/s then what will the velocity of center of mass of system ?
 (1) 1.5 m/s (2) 0.5 m/s (3) 3.5 m/s (4) 2.5 m/s

Ans. (4)

Sol. From linear momentum conservation

$$2 \times 4 + 0 = 2 \times 1 + m_2 v_2$$

From the definition of elastic collision

$$v_2 - v_1 = e(u_1 - u_2)$$

$$v_2 - 1 = 1(4 - 0)$$

$$v_2 = 5$$

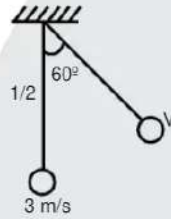
$$\theta = 2 + m_2 \times 5$$

$$m_2 = 6/5$$

$$V_{cm} = \frac{m_1 v_1 + m_2 v_2}{m_1 + m_2} = \frac{2 \times 4 + 0}{2 + \frac{6}{5}} = 2.5 \text{ m/s}$$

© Resonance Eduventures Limited | Toll-Free 1800-258-5555 | (0)744 2777777, 2777700 | contact@resonance.ac.in | CIN - U80302RJ2007PLC024029

What will be the speed of pendulum mass, when string of pendulum makes an angle of 60° with vertical ?



- (1) 2 m/s (2) 4 m/s (3) 6 m/s (4) 8 m/s

Ans. (1)

$$\text{Sol. } \frac{1}{2} m u^2 = \frac{1}{2} m v^2 + m g l (1 - \cos 60^\circ)$$

$$u^2 = v^2 + 2g l (1 - \cos 60^\circ)$$

$$9 = v^2 + 20 \times \frac{1}{2} \times \frac{1}{2}$$

$$9 = v^2 + 5$$

$$\dots$$

© Resonance Eduventures Limited | Toll-Free 1800-258-5555 | (0)744 2777777, 2777700 | contact@resonance.ac.in | CIN - U80302RJ2007PLC024029

Resonance Eduventures Ltd.

Reg. Office & Corp. Office : CG Tower, A-46 & 52, IPIA, Near City Mall, Jhalawar Road, Kota (Raj.) - 324005

Ph. No.: +91-744-2777777, 2777700 | FAX No. : +91-022-39167222

To Know more : sms RESO at 56677 | Website : www.resonance.ac.in | E-mail : contact@resonance.ac.in | CIN : U80302RJ2007PLC024029

Toll Free : 1800 258 5555 WhatsApp : 7340010333 Facebook : facebook.com/resonanceedu Twitter : twitter.com/Resonanceedu www.youtube.com/resonance Blog : blog.resonance.ac.in

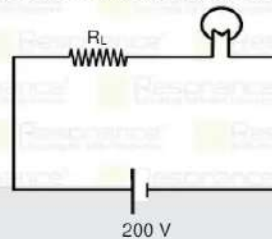
This solution was download from Resonance JEE (MAIN) 2021 Solution portal

PAGE # 1

© Resonance Eduventures Limited | Toll-Free 1800-258-5555 | (0)744 2777777, 2777700 | contact@resonance.ac.in | CIN - U80302RJ2007PLC024029

Resonance | JEE MAIN-2021 | DATE : 25-07-2021 (SHIFT-1) | PAPER-1 | MEMORY BASED | PHYSICS

3. A bulb has rated power 200 W and rated voltage 100 V. This bulb is connected in circuit as shown in figure. What should be value of load resistance R_L so that bulb works at rated voltage ?



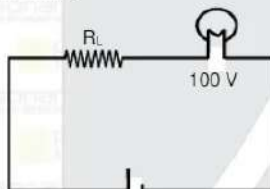
- (1) 25Ω (2) 50Ω (3) 75Ω (4) 100Ω

Ans. (2)

$$\text{Sol. } P = \frac{V^2}{R}$$

$$200 = \frac{(100)^2}{R}$$

© Resonance Eduventures Limited | Toll-Free 1800-258-5555 | (0)744 2777777, 2777700 | contact@resonance.ac.in | CIN - U80302RJ2007PLC024029



200 V
 Current through bulb
 $i = \frac{100}{50} \Rightarrow 2A$
 $V_L = 100$
 $R_L = \frac{100}{2} = 50 \Omega$

4. Two geometrical identical wires have young modules Y_1 and Y_2 then find equivalent young modules :



- (1) $Y_1 + Y_2$ (2) $\frac{Y_1 + Y_2}{2}$ (3) $\frac{Y_1 Y_2}{Y_1 + Y_2}$ (4) $\sqrt{Y_1 Y_2}$

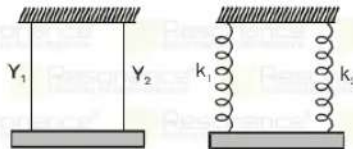
Ans. (2)

Resonance Eduventures Ltd.

Reg. Office & Corp. Office : CG Tower, A-46 & 52, IPIA, Near City Mall, Jhalawar Road, Kota (Raj.) - 324005
 Ph. No. : +91-744-2777777, 2777700 | FAX No. : +91-022-39167222

To Know more : sms RESO at 56677 | Website : www.resonance.ac.in | E-mail : contact@resonance.ac.in | CIN : U80302RJ2007PLC024029
 Toll Free : 1800 258 5555 | 7340010333 | facebook.com/ResonanceEdu | twitter.com/ResonanceEdu | www.youtube.com/reswatch | blog.resonance.ac.in

Sol.



$K_{eq} = K_1 + K_2$
 $\frac{Y_2 A}{l} = \frac{Y_1 A}{l} + \frac{Y_2 A}{l}$
 $Y = \frac{Y_1 + Y_2}{2}$

5. Battery is connected to a resistor and a inductor for a long time as shown in figure, then battery is removed & short circuited. Find the current in the circuit after 1 ms after battery get removed :



- (1) 1.32A (2) 0.44A (3) 0.65A (4) 0.74A

Ans. (4)

Sol. $i_0 = \frac{20}{10} = 2A$
 $i = i_0 e^{-Rt/L}$
 $= 2 \times e^{-\frac{10 \times 10^{-3}}{10 \times 10^{-3}}} = \frac{2}{e} = 0.74A$

6. A particle of mass 4m at rest splits into two particle of mass 3 m and m. If both the masses have different velocities then find ratio of their De-Broglie wavelength ?
 (1) 1 : 1 (2) 1 : 2 (3) 2 : 1 (4) 1 : 3

Ans. (1)

Sol. $\lambda = \frac{h}{p}$
 here momentum is same for both
 $\lambda_{3m} = \lambda_m = 1$

7. An electron, a proton and an alpha particle are get accelerated by giving same K.E., then which of the following is correct about De-Broglie wavelength.

- (1) $\lambda_e < \lambda_p < \lambda_{\alpha}$ (2) $\lambda_e > \lambda_p > \lambda_{\alpha}$ (3) $\lambda_e = \lambda_p < \lambda_{\alpha}$ (4) $\lambda_e = \lambda_p > \lambda_{\alpha}$

Ans. (2)

$\lambda = \frac{h}{p}$

Sol. $\lambda = \frac{h}{\sqrt{2mKE}} \Rightarrow \lambda \propto \frac{1}{\sqrt{m}}$

$m_e > m_p > m_\alpha$

SO $\lambda_e > \lambda_p > \lambda_\alpha$

Resonance Eduventures Ltd.

Reg. Office & Corp. Office : CG Tower, A-46 & 52, IPIA, Near City Mall, Jhalawar Road, Kota (Raj.) - 324005

Ph. No.: +91-744-2777777, 2777700 | FAX No. : +91-022-39167222

To Know more : sms RESO at 56677 | Website : www.resonance.ac.in | E-mail : contact@resonance.ac.in | CIN : U80302RJ2007PLC024029

Toll Free : 1800 258 5555 | 7340010333 | [facebook.com/ResonanceEdu](https://www.facebook.com/ResonanceEdu) | twitter.com/ResonanceEdu | www.youtube.com/resonance | blog.resonance.ac.in

This solution was download from Resonance JEE (MAIN) 2021 Solution portal

PAGE # 3

© Resonance Eduventures Limited | Toll-Free 1800-258-5555 | (0)744 2777777, 2777700 | contact@resonance.ac.in | CIN - U80302RJ2007PLC024029

Resonance
Educating for better tomorrow | JEE MAIN-2021 | DATE : 25-07-2021 (SHIFT-1) | PAPER-1 | MEMORY BASED | PHYSICS

8. A ball of mass m is thrown towards wall in two different situations,
 (i) Ball strikes perpendicular to wall (ii) Ball strikes at an angle of 45° to wall
 What will be ratio of impulse in two cases ?
 (1) 2 : 1 (2) 1 : 1 (3) 1 : 2 (4) 3 : 1

Ans. (2)
 Sol.



During elastic collision with vertical wall, velocity in vertical direction remains constant and component velocity along horizontal direction become opposite after collision.

So, change in momentum,

© Resonance Eduventures Limited | Toll-Free 1800-258-5555 | (0)744 2777777, 2777700 | contact@resonance.ac.in | CIN - U80302RJ2007PLC024029

So, $\frac{\Delta P_1}{\Delta P_2} = \frac{2mu \cos \theta}{2mu \cos \theta} = 1 : 1$

9. Photons of wavelength 400nm strikes on a material with energy 1000J in 10 sec. what will be no. of electron leaving the material in one second ?
 (1) 5×10^9 (2) 5×10^{15} (3) 5×10^{13} (4) 5×10^{10}

Ans. (2)

Sol. Energy = $N \times \frac{hc}{\lambda}$

$1000 = \frac{12400}{4000} \times N \times 1.6 \times 10^{-19}$

$N = \frac{1000 \times 4}{12400 \times 1.6 \times 10^{-19}}$

So, number of electron leaving from material in 1 sec = $\frac{N}{10} = 5 \times 10^{15}$

10. A radioactive nuclei of initial number of active nuclei N_0 . Decays $N_0/4$ active nuclei in time t_1 and decays to $N_0/2$ active nuclei in time t_2 . Find the ratio between t_1 and t_2 ?

© Resonance Eduventures Limited | Toll-Free 1800-258-5555 | (0)744 2777777, 2777700 | contact@resonance.ac.in | CIN - U80302RJ2007PLC024029

Ans. (1)

Sol. $N = N_0 e^{-\lambda t}$

$\frac{3N_0}{4} = N_0 e^{-\lambda t_1}$

$t_1 = \frac{\ln 4}{\lambda \cdot 3}$; $t_2 = \frac{\ln 2}{\lambda}$

$\frac{t_1}{t_2} = \frac{\ln 4}{\ln 2} \cdot \frac{\lambda}{\lambda \cdot 3} = \frac{2 \ln 2 - \ln 3}{\ln 2} = 2 - \frac{1.098}{0.693} = 2 - 1.58 = 0.42$

Resonance Eduventures Ltd.

Reg. Office & Corp. Office : CG Tower, A-46 & 52, IPIA, Near City Mall, Jhalawar Road, Kota (Raj.) - 324005

Ph. No.: +91-744-2777777, 2777700 | FAX No. : +91-022-39167222

To Know more : sms RESO at 56677 | Website : www.resonance.ac.in | E-mail : contact@resonance.ac.in | CIN : U80302RJ2007PLC024029

Toll Free : 1800 258 5555 | 7340010333 | [facebook.com/ResonanceEdu](https://www.facebook.com/ResonanceEdu) | twitter.com/ResonanceEdu | www.youtube.com/resonance | blog.resonance.ac.in

This solution was download from Resonance JEE (MAIN) 2021 Solution portal

PAGE # 4

© Resonance Eduventures Limited | Toll-Free 1800-258-5555 | (0)744 2777777, 2777700 | contact@resonance.ac.in | CIN - U80302RJ2007PLC024029

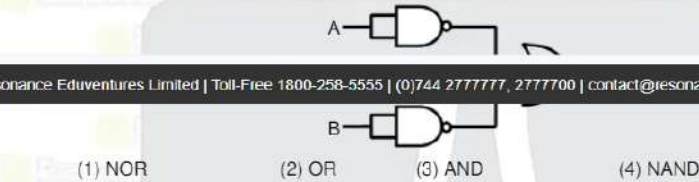
11. For an ideal gas, C_v is the specific heat at constant volume and C_p is the Specific heat at constant pressure. if at some temperature T_p , they are related as $C_p - C_v = R$ and for some other temperature T_Q They are related as $C_p - C_v = 1.1R$, then which is correct

- (1) $T_p > T_Q$ (2) $T_Q > T_p$ (3) $T_p = T_Q$ (4) can't say

Ans. (1)

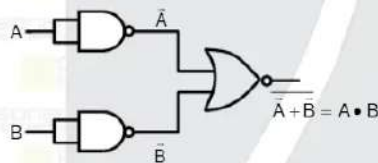
Sol. At high temperature gas behaves as ideal gas.

12. Find equivalent circuit

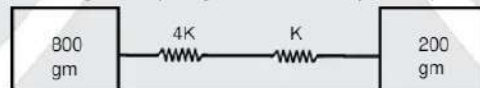


Ans. (3)

Sol.



13. Two block of mass 800 gm and 200gm are attached by two springs of spring constant 4 K and K in series as shown in figure. Find angular frequency of oscillation of system ? (Value of K = 20 N/m)



Ans. (1)

Sol. $T = 2\pi \sqrt{\frac{\mu}{K_{eq}}}$

$$\mu = \frac{m_1 m_2}{m_1 + m_2} = \frac{200 \times 800}{200 + 800} = 160 \text{ g} = 0.16 \text{ kg}$$

$$K_{eq} = \frac{k_1 k_2}{k_1 + k_2} = \frac{4k \times k}{4k + k} = \frac{4}{5}k = \frac{4}{5} \times 20 = 16 \frac{\text{N}}{\text{m}}$$

$$T = 2\pi \sqrt{\frac{0.16}{16}}; T = \pi/5 \text{ sec.}$$

$$\omega = \frac{2\pi}{T} = 10 \text{ rad/s}$$

Resonance Eduventures Ltd.

Reg. Office & Corp. Office : CG Tower, A-46 & 52, IPIA, Near City Mall, Jhalawar Road, Kota (Raj.) - 324005

Ph. No.: +91-744-2777777, 2777700 | FAX No.: +91-022-39167222

To Know more : sms RESO at 56677 | Website : www.resonance.ac.in | E-mail : contact@resonance.ac.in | CIN : U80302RJ2007PLC024029

14. A conducting loop of radius 0.1 m has a time variable magnetic field $B(t) = \frac{4}{100} \left[1 - \frac{t}{100} \right]$. Find energy dissipated till magnetic field becomes zero if resistance of loop is 0.01Ω .

- (1) $16 \times 10^{-7} \text{ J}$ (2) $8 \times 10^{-7} \text{ J}$ (3) $4 \times 10^{-7} \text{ J}$ (4) $2 \times 10^{-7} \text{ J}$

Ans. (1)

Sol. $\mathcal{E} = \left| -A \frac{dB}{dt} \right|$

$$\mathcal{E} = \pi(0.1)^2 \times \frac{4}{100} \times \frac{1}{100}$$

$$\mathcal{E} = 4\pi \times 10^{-6} \text{ V}$$

$$\text{Energy} = \frac{V^2}{R} \times t = \frac{100^2}{10^{-2}} \times 100 = 16 \times 10^6 \times 100 = 16 \times 10^9 \text{ J}$$

15. An Electric field of a wave propagating as $E = E_0 \cos(kz - 5.6 \times 10^3 t)$ reflecting from mirror at $z = a$, then
 (1) $\lambda = 5.6 \text{ m}$
 (2) $f = 5.6 \times 10^3 \text{ Hz}$
 (3) Equation of reflecting wave $E = E_0 \cos(kz - 5.6 \times 10^3 t)$
 (4) Equation of reflecting wave $E = -E_0 \cos(kz + 5.6 \times 10^3 t)$

Ans. (4)

Sol. $w = 5.6 \times 10^3$

$$2\pi f = 5.6 \times 10^3$$

$$f = \frac{5.6 \times 10^3}{2\pi} = \frac{5.6 \times 10^3}{2 \times 3.14} = 891.7 \text{ Hz}$$

$$C = f\lambda$$

$$\lambda = \frac{c}{f} = \frac{3 \times 10^8}{891.7} = 3.36 \times 10^5 \text{ m}$$

Reflecting wave

$$E = E_0 \cos(kz - 5.6 \times 10^3 t + \pi)$$

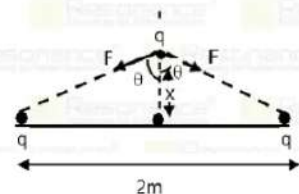
© Resonance Eduventures Limited | Toll-Free 1800-258-5555 | (0)744 2777777, 2777700 | contact@resonance.ac.in | CIN - U80302RJ2007PLC024029

16. Two similar charge of magnitude q are fixed at distance of 2m . And another opposite charge of same magnitude is brought at center point between two charges and given a slight displacement along equatorial direction and released then angular frequency of oscillations of opposite charge will be? (Value of $q^2 = 10 \text{ C}^2$) (Mass of opposite charge 0.2 gram)

- (1) $3 \times 10^7 \text{ rad/s}$ (2) $3 \times 10^5 \text{ rad/s}$ (3) $3 \times 10^{-5} \text{ rad/s}$ (4) $3 \times 10^6 \text{ rad/s}$

Ans. (1)

Sol.



Resonance Eduventures Ltd.

Reg. Office & Corp. Office : CG Tower, A-46 & 52, IPIA, Near City Mall, Jhalawar Road, Kota (Raj.) - 324005

© Resonance Eduventures Limited | Toll-Free 1800-258-5555 | (0)744 2777777, 2777700 | contact@resonance.ac.in | CIN - U80302RJ2007PLC024029

Toll Free : 1800 258 5555 | 7340010333 | facebook.com/resonanceedu | twitter.com/resonanceedu | www.youtube.com/resonance | blog.resonance.ac.in

This solution was download from Resonance JEE (MAIN) 2021 Solution portal

PAGE # 6

Resonance® | JEE MAIN-2021 | DATE : 25-07-2021 (SHIFT-1) | PAPER-1 | MEMORY BASED | PHYSICS

Net force on charge is

$$F_{\text{net}} = 2F \cos \theta \text{ Here } F = \frac{kq^2}{(1+x^2)}$$

$$F_{\text{net}} = \frac{2kq^2}{(1+x^2)} \cdot \frac{x}{\sqrt{1+x^2}}$$

$$F_{\text{net}} = \frac{2kq^2 x}{(1+x^2)^{3/2}} \because x \ll 1, \text{ so } x^2 \ll 1$$

© Resonance Eduventures Limited | Toll-Free 1800-258-5555 | (0)744 2777777, 2777700 | contact@resonance.ac.in | CIN - U80302RJ2007PLC024029

$$ma = 2kq^2 x$$

$$a = \frac{2kq^2 x}{m}$$

$$\omega = \sqrt{\frac{2kq^2}{m}} = \sqrt{\frac{2 \times 9 \times 10^9 \times 10}{2 \times 10^{-4}}} = 3 \times 10^7 \text{ rad/sec.}$$

17. Water drops are falling from a tap in regular interval of time. A drop falls from the tap and after 4 second of falling, the drop is 34.3m away from next drop. Then drops are falling at rate of (Use $g = 9.8 \text{ m/s}^2$)

- (1) 1 drop in 1 sec (2) 1 drop in 7 sec (3) 1 drop in 5 sec (4) 1 drop in 6 sec

Ans. (1)

Sol. Let next drop after t sec distance travelled by 1st drop in 4 sec. is $S_1 = \frac{1}{2} at^2 = 78.4 \text{ m}$ (t should be less than 4 sec) distance travelled by succeeding drop in $4 - t$ sec

$$S_2 = \frac{1}{2} a (4 - t)^2$$

$$(4-t)^2 = 9$$

$$4-t = 3$$

$$t = 1 \text{ sec}$$

18. In YDSE, distance between the slits are varied as $d = a + b \sin \omega t$. What will be difference between maximum and minimum fringe width?

(1) $\frac{2bD\lambda}{a^2 - b^2}$ (2) $\frac{4bD\lambda}{a^2 - b^2}$ (3) $\frac{3bD\lambda}{a^2 + b^2}$ (4) $\frac{5bD\lambda}{a^2 + b^2}$

Ans. (1)

Sol. Fringe width = $\frac{D\lambda}{d}$

$$\beta = \frac{D\lambda}{(a + b \sin \omega t)}$$

$$\beta_{\max} - \beta_{\min} \Rightarrow \frac{D\lambda}{a-b} - \frac{D\lambda}{a+b} \Rightarrow D\lambda \left[\frac{a+b-a+b}{a^2-b^2} \right] = \frac{2bD\lambda}{a^2-b^2}$$

Resonance Eduventures Ltd

Ph. No.: +91-744-2777777, 2777700 | FAX No.: +91-022-39167222

To Know more : sms RESO at 56677 | Website: www.resonance.ac.in | E-mail: contact@resonance.ac.in | CIN : U80302RJ2007PLC024029

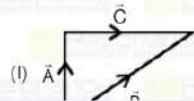
Toll Free : 1800 258 5555 | 7340010333 | facebook.com/resonance | twitter.com/resonance | www.youtube.com/resonance | blog.resonance.ac.in

This solution was download from Resonance JEE (MAIN) 2021 Solution portal

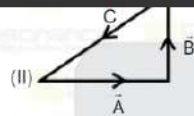
PAGE # 7

Resonance® Educating for better tomorrow | JEE MAIN-2021 | DATE : 25-07-2021 (SHIFT-1) | PAPER-1 | MEMORY BASED | PHYSICS

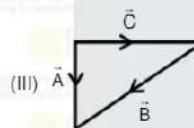
19. Match the following column.



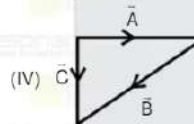
(a) $\vec{C} - \vec{A} - \vec{B} = 0$



(b) $\vec{A} - \vec{C} - \vec{B} = 0$



(c) $\vec{B} - \vec{A} - \vec{C} = 0$



(d) $\vec{A} + \vec{B} + \vec{C} = 0$

- (1) (I) c ; (II) d ; (III) b ; (IV) a
(3) (I) c ; (II) d ; (III) a ; (IV) b

- (2) (I) d ; (II) c ; (III) b ; (IV) a
(4) (I) b ; (II) d ; (III) a ; (IV) c

(II) $\vec{A} + \vec{B} + \vec{C} = 0$

(III) $\vec{A} - \vec{B} - \vec{C} = 0$

(IV) $\vec{A} + \vec{B} - \vec{C} = 0$

20. In a parallel plate capacitor distance between the plates is 'd'. If dielectric of variable permeability is filled as :

$$\epsilon(x) = \epsilon_0 + kx \quad ; \quad 0 < x \leq d/2$$

$$\epsilon(x) = \epsilon_0 + k(d-x) \quad ; \quad d/2 < x \leq d$$

Find capacitance ?

(1) $\frac{1}{Ak} \times \frac{\epsilon_0 + kd}{2\epsilon_0}$ (2) $\frac{1}{Ak} \times 2/n \frac{\epsilon_0 + kd}{\epsilon_0}$ (3) $\frac{1}{Ak} \times \frac{\epsilon_0 - kd}{\epsilon_0}$ (4) $\frac{1}{Ak} \times 2/n \frac{\epsilon_0 - kd}{\epsilon_0}$

Ans. (2)

Resonance Eduventures Ltd.

Reg. Office & Corp. Office : CG Tower, A-46 & 52, IPIA, Near City Mall, Jhalawar Road, Kota (Raj.) - 324005

Ph. No.: +91-744-2777777, 2777700 | FAX No. : +91-022-39167222

To Know more : sms RESO at 56677 | Website : www.resonance.ac.in | E-mail : contact@resonance.ac.in | CIN : U80302RJ2007PLC024029

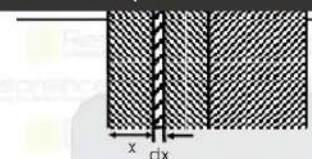
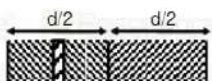
Toll Free : 1800 258 5555 | 7340010333 | facebook.com/resonanceedu | twitter.com/resonanceedu | www.youtube.com/resonance | blog.resonance.ac.in

This solution was download from Resonance JEE (MAIN) 2021 Solution portal

PAGE # 8

Resonance® | JEE MAIN-2021 | DATE : 25-07-2021 (SHIFT-1) | PAPER-1 | MEMORY BASED | PHYSICS

Sol.



$$\frac{1}{C_{eq}} \Rightarrow \int \frac{dx}{A_0 + kx}$$

$$\Rightarrow \int_0^{d/2} \frac{dx}{A_0 + kx} + \int_{d/2}^d \frac{dx}{A_0 + k(d-x)}$$

$$\Rightarrow \frac{1}{A_0 k} \left\{ \ln(A_0 + kx) \Big|_0^{d/2} + \ln(A_0 + k(d-x)) \Big|_{d/2}^d \right\}$$

$$\Rightarrow \frac{1}{A_0 k} \times 2 \ln \frac{A_0 + kd}{A_0}$$

21. The position of an object varies as $\vec{R} = 10\lambda\beta t^2\hat{i} + 5\beta(t-5)\hat{j}$. Find time at which angular momentum

Ans. (1)

Sol. $\vec{R} = 10\lambda\beta t^2\hat{i} + 5\beta(t-5)\hat{j}$

$$\vec{v} = 20\lambda\beta t\hat{i} + 5\beta\hat{j}$$

$$\vec{L} = m(\vec{r} \times \vec{v})$$

$$\vec{L} = m(10\lambda\beta t^2\hat{i} + 5\beta(t-5)\hat{j}) \times (20\lambda\beta t\hat{i} + 5\beta\hat{j})$$

at $t = 0$, $\vec{L} = 0$

At any time t

$$\vec{L} = m(50\lambda\beta^2 t\hat{k} - 100\lambda\beta^2(t-5)\hat{k})$$

$$0 = 50\lambda\beta^2 [t - 2(t-5)]\hat{k}$$

$$\Rightarrow t - 2t + 10 = 0$$

$$\Rightarrow t = 10 \text{ sec}$$

Resonance Eduventures Ltd.

Reg. Office & Corp. Office : CG Tower, A-46 & 52, IPIA, Near City Mall, Jhalawar Road, Kota (Raj.) - 324005

Ph. No.: +91-744-2777777, 2777700 | FAX No. : +91-022-39167222

To Know more : sms RESO at 56677 | Website : www.resonance.ac.in | E-mail : contact@resonance.ac.in | CIN : U80302RJ2007PLC024029

Toll Free : 1800 258 5555 | 7340010333 | facebook.com/resonanceedu | twitter.com/resonanceedu | www.youtube.com/resonance | blog.resonance.ac.in

This solution was download from Resonance JEE (MAIN) 2021 Solution portal

PAGE # 9

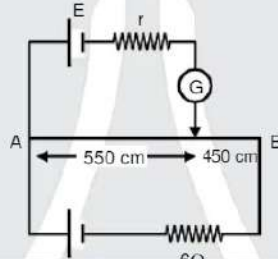
22. A message signal $x_m = 10 \sin(2\pi \times 10^5 t)$ is amplitude modulated with carrier signal $x_c = 20 \sin(2\pi \times 10^7 t)$ then find the half of band width.

© Resonance Eduventures Limited | Toll-Free 1800-258-5555 | (0)744 2777777, 2777700 | contact@resonance.ac.in | CIN - U80302RJ2007PLC024029

Sol. Band width = $2f_m$

$$\begin{aligned} \therefore \text{Half of bandwidth} &= f_m \\ &= 10^5 \text{ Hz} \\ &= 100 \text{ KHz} \end{aligned}$$

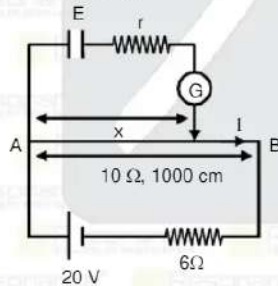
23. Circuit shown is in the balanced state in which galvanometer shows non-deflection. Given that wire AB has $0.01 \Omega/\text{cm}$ of resistance. Find maximum possible value of voltage that can be measured by this set up.



© Resonance Eduventures Limited | Toll-Free 1800-258-5555 | (0)744 2777777, 2777700 | contact@resonance.ac.in | CIN - U80302RJ2007PLC024029

Ans. (2)

Sol. At zero deflection



The maximum value of E that can be measured = V_{AB}

$$V_{AB} = \frac{20}{10+6} \times 10 = 12.5V$$

© Resonance Eduventures Limited | Toll Free 1800-258-5555 | (0)744 2777777, 2777700 | contact@resonance.ac.in | CIN - U80302RJ2007PLC024029

Resonance Eduventures Ltd.

Reg. Office & Corp. Office : CG Tower, A-46 & 52, IPIA, Near City Mall, Jhalawar Road, Kota (Raj.) - 324005

Ph. No.: +91-744-2777777, 2777700 | FAX No. : +91-022-39167222

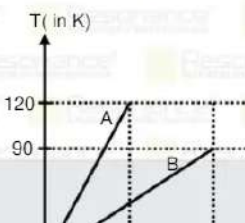
To Know more : sms RESO at 56677 | Website : www.resonance.ac.in | E-mail : contact@resonance.ac.in | CIN : U80302RJ2007PLC024029

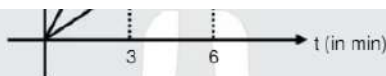
Toll Free : 1800 258 5555 | 7340010333 | facebook.com/ResonanceEdu | twitter.com/ResonanceEdu | www.youtube.com/reswatch | blog.resonance.ac.in

This solution was download from Resonance JEE (MAIN) 2021 Solution portal

PAGE # 10

24. The temperature vs time graph for two different gases A and B having same number of moles is as shown both the gases





- (1) $3/8$ (2) $5/8$ (3) $7/8$ (4) $9/8$

Ans. (1)

Sol. $Q = nC\Delta T$

$$\frac{dQ}{dt} = nC \frac{dT}{dt}$$

Rate of heat is same for both gases

$$\frac{C_1}{C_2} = \frac{\left(\frac{dT}{dt}\right)_2}{\left(\frac{dT}{dt}\right)_1} = \frac{90}{120} = \frac{90 \times 3}{120 \times 6} = \frac{3}{8}$$

25. For a magnetic material, the relative change in magnetic susceptibility is equal to 2.2×10^{-4} . Find the percentage change in magnetic field ?

- (1) 0.012 (2) 0.025 (3) 0.022 (4) 0.028

Ans. (3)

Sol. $\mu_r = 1 + \chi$

$$\Delta\mu_r = \Delta\chi$$

also $B \propto \mu_r$
 $B = k\mu_r$ ($k = \text{constant}$)

$$\% \text{ change} = \frac{\Delta B}{B} \times 100 = \frac{k(\Delta\mu_r)}{k\mu_r} \times 100$$

$$= \frac{2.2 \times 10^{-4}}{1} \times 100 = 0.022 \%$$

26. A ray incident at an angle 30° on the interface of diamond and vacuum from the diamond side then which of following is correct (given $\mu_{\text{diamond}} = 2.42$)

- (1) The incident of ray will not get refracted (2) The ray will not get refracted if incident at 53°
 (3) The ray will get refracted if incident at 22° (4) There is always TIR for angle greater then 30°

Resonance Eduventures Ltd.

Reg. Office & Corp. Office : CG Tower, A-46 & 52, IPIA, Near City Mall, Jhalawar Road, Kota (Raj.) - 324005

Ph. No.: +91-744-2777777, 2777700 | FAX No.: +91-022-39167222

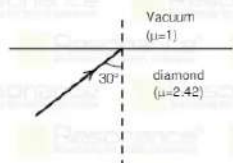
To Know more : sms RESO at 56677 | Website : www.resonance.ac.in | E-mail : contact@resonance.ac.in | CIN : U80302RJ2007PLC024029

Toll Free : 1800 258 5555 7340010333 facebook.com/ResonanceEdu twitter.com/ResonanceEdu www.youtube.com/reswatch blog.resonance.ac.in

This solution was download from Resonance JEE (MAIN) 2021 Solution portal

PAGE # 11

Sol.



$$\text{Critical angle } C = \sin^{-1}\left(\frac{1}{2.42}\right) = 24.4^\circ$$

Given Incident angle $30^\circ > C$

So there is TIR at interface

27. A monoatomic gas filled in a piston cylinder arrangement, its temperature changes from T_1 to T_2 and length of gas column changes from L_1 to L_2 , against atmosphere. Then the ratio of T_1/T_2 :

- (1) $\left(\frac{L_2}{L_1}\right)^{2/3}$ (2) $\left(\frac{L_1}{L_2}\right)^{2/3}$ (3) $\left(\frac{L_2}{L_1}\right)$ (4) $\left(\frac{L_1}{L_2}\right)$

at constant atmospheric pressure

$$\frac{T_1}{T_2} = \frac{V_1}{V_2}$$

$$\frac{T_1}{T_2} = \frac{AL_1}{AL_2}$$

$$\frac{T_1}{T_2} = \frac{L_1}{L_2}$$

28. A particle is revolving around a planet with maximum distance x and minimum distance y . If maximum velocity of particle is v_0 then find minimum velocity of particle :
- (1) $\frac{v_0 x}{y}$ (2) $\frac{v_0 y}{x}$ (3) $\frac{v_0 x^2}{y^2}$ (4) $\frac{v_0 y^2}{x^2}$

Ans. (2)
Sol.



© Resonance Eduventures Limited | Toll-Free 1800-258-5555 | (0)744 2777777, 2777700 | contact@resonance.ac.in | CIN - U80302RJ2007PLC024029

By angular momentum conservation

$$mv_0 y = mvx$$

$$v = \frac{v_0 y}{x}$$

Resonance Eduventures Ltd.

Reg. Office & Corp. Office : CG Tower, A-46 & 52, IPIA, Near City Mall, Jhalawar Road, Kota (Raj.) - 324005

Ph. No.: +91-744-2777777, 2777700 | FAX No. : +91-022-39167222

To Know more : sms RESO at 56677 | Website : www.resonance.ac.in | E-mail : contact@resonance.ac.in | CIN : U80302RJ2007PLC024029

Toll Free : 1800 258 5555 | 7340010333 | facebook.com/ResonanceIndia | twitter.com/ResonanceIndia | www.youtube.com/Resonance | blog.resonance.ac.in

This solution was download from Resonance JEE (MAIN) 2021 Solution portal

PAGE # 12

© Resonance Eduventures Limited | Toll-Free 1800-258-5555 | (0)744 2777777, 2777700 | contact@resonance.ac.in | CIN - U80302RJ2007PLC024029

Resonance Educating for better tomorrow | JEE MAIN-2021 | DATE : 25-07-2021 (SHIFT-1) | PAPER-1 | MEMORY BASED | PHYSICS

29. A radioactive material of mass number 198 decays with half-life of 3 days. If initial amount of radioactive material is 2 mg, then its initial activity will be ?

- (1) 1626×10^5 dps (2) 1626×10^{10} dps (3) 1626×10^8 dps (4) 1626×10^9 dps

Ans. (2)

Sol. No. of Nuclei = $\frac{m}{M} N_A = \frac{2 \times 10^{-3}}{198} \times 6.02 \times 10^{23}$

$$A_0 = \lambda N_0 = \frac{0.693}{3 \times 24 \times 60 \times 60} \times \frac{2 \times 10^{-3}}{198} \times 6.02 \times 10^{23}$$

$$1625 \times 10^{-8} \times 10^{18}$$

$$1626 \times 10^{10} \text{ dps}$$

30. Based on given statement choose the correct option

Statement I : For a disc situated in x-y plane. The radius of gyration is same for x-axis, y-axis and z-axis.

Statement II : In case of rigid body motion there is no change in shape and mass.

- (1) Statement 1 & 2 both are true

© Resonance Eduventures Limited | Toll-Free 1800-258-5555 | (0)744 2777777, 2777700 | contact@resonance.ac.in | CIN - U80302RJ2007PLC024029

- (2) Statement-1 is false Statement-2 is true
(3) Statement-1 is true Statement-2 is false
(4) Statement-2 is true Statement-1 is false.

Ans. (3)

© Resonance Eduventures Limited | Toll-Free 1800-258-5555 | (0)744 2777777, 2777700 | contact@resonance.ac.in | CIN - U80302RJ2007PLC024029

Resonance Eduventures Ltd.

Reg. Office & Corp. Office : CG Tower, A-46 & 52, IPIA, Near City Mall, Jhalawar Road, Kota (Raj.) - 324005

Ph. No.: +91-744-2777777, 2777700 | FAX No.: +91-022-39167222

To Know more : sms RESO at 56677 | Website: www.resonance.ac.in | E-mail : contact@resonance.ac.in | CIN : U80302RJ2007PLC024029

Toll Free : 1800 258 5555 | [7340010333](https://www.facebook.com/ResonanceEd) | [facebook.com/ResonanceEd](https://www.linkedin.com/company/resonance-edu) | www.youtube.com/channel/UCpsovat8 | www.instagram.com/resonance_edu | www.tiktok.com/@resonance_edu | [blog.resonance.ac.in](https://www.resonance.ac.in/blog)

This solution was download from Resonance JEE (MAIN) 2021 Solution portal

PAGE # 13

© Resonance Eduventures Limited | Toll Free 1800-258-5555 | (0)744 2777777, 2777700 | contact@resonance.ac.in | CIN - U80302RJ2007PLC024029



RESULT: JEE (Advanced), JEE (Main), NEET

HIGHEST No. of Classroom Selections
in JEE (Advanced) 2020 from any Institute of Kota

5 AIRs in TOP-50 in JEE (Adv.) 2020 from Classroom

© Resonance Eduventures Limited | Toll-Free 1800-258-5555 | (0)744 2777777, 2777700 | contact@resonance.ac.in | CIN - U80302RJ2007PLC024029



AIR-2 (GEN-EWS)	Zonal Topper IIT-Kharagpur	2nd Rank in IIT-Kharagpur Zone	AIR-30	AIR-41
AIR-15	AIR-25	AIR-29	AIR-30	AIR-41
DHANANJAY KEJRIWAL	SAMARTH AGARWAL	SANKALP PARASHAR	AARYAN K. GUPTA	UTKARSH P. SINGH
With us Since Class 9 th	With us Since Class 11 th	With us Since Class 11 th	With us Since Class 9 th	With us Since Class 10 th

Total Selections in JEE (Advanced) 2020	Eligible for JEE (Advanced) Through JEE (Main) 2020	NEET 2020
4505	14755	2646
Classroom: 3441 Distance: 1064	Classroom: 13447 Distance: 1308	Classroom: 1037 Distance: 609

© Resonance Eduventures Limited | Toll-Free 1800-258-5555 | (0)744 2777777, 2777700 | contact@resonance.ac.in | CIN - U80302RJ2007PLC024029

ADMISSION OPEN for Session 2021-22

ONLINE + OFFLINE PROGRAMS

CLASS 11, 12 & 12+

Target: JEE (Main+Adv.) | JEE (Main) | NEET

Scholarship Upto 90%*

Toll Free: 1800 258 5555 | Visit us: www.resonance.ac.in

